





# Ecuaciones Visuales Resuelve estos enigmas visuales.





 = 16


 = 8


 = 15


 = ?


 = 4


 = 10


 = 42


 = ?


 = 6


 = 28


 = 69


 = ?


 = 18


 = 38


 = 40


 = ?


 = 9


 = 19


 = 142

 = ?

 = 12

 = 23

 = 83

 = ?